

© 2019 All rights reserved.

AkadaLearn

All rights reserved. No part of this publication may be reproduced, stored in a retrieval system, or transmitted in any form or by any means, electronic, mechanical, photocopying, recording or otherwise, without either the prior written permission of the publisher or a license permitting restricted copying.

All trademarks used herein are the property of their respective owners. The use of any trademark in this text does not vest in the author or publisher any trademark ownership rights in such trademarks, nor does the use of such trademarks imply any affiliation with or endorsement of this book by such owners.

AkadaLearn though not direct author/publisher has sought the right to distribute this publication from respective authors and content owner, in case of infringement from our partner, we will not bear such liabilities but transfer to the content providers.

For detail referencing and credit please see www.akadalearn.com/publication_credits

Computer Science Exam Questions and Answers
Pack

© 2019 Test Marshal International All rights reserved.

Published in 2019 by Teststreams Nigeria.

BN: 1-0041-6232-6

Usage Terms: This Book is only Licensed for personal study and for Teachers use ONLY for the purpose of drawing examination questions. Unauthorised sharing or distribution through any means is prohibited and offenders will face severe sanctions.


The information contained in this material is believed to be accurate. However, their accuracy cannot be guaranteed nor is any warranty conveyed as to your ultimate exam success.

QUESTIONS

TOPIC: COMPUTER APPRECIATION

DIRECTION: Choose the correct answer from the lettered options.

1. Label the image correctly



- A. Printer, web cam, mouse
- B. Printer, keyboard, monitor
- C. Speaker, system unit
- D. Web cam, scanner, speaker

2. The picture shown is a _____ .



- A. speaker
- B. monitor
- C. mouse
- D. car

3. We use the _____ to print our documents from the computer.

- A. printer
- B. computer
- C. monitor
- D. pencil

4. Label the picture correctly



- A. Speaker, Keyboard
- B. System unit, Speaker
- C. Scanner, Keyboard
- D. Monitor, Scanner

5. The part of the computer system that looks like a rat is called _____

- A. CPU
- B. mouse
- C. keyboard
- D. monitor

6. We use the computer to do the following EXCEPT _____ .

- A. draw
- B. type
- C. play music
- D. eat

7. Which of these is part of a computer system?

- A. Rat
- B. Mouse
- C. Dog
- D. Cat

8. _____ is a part of a computer system.

- A. Mouse
- B. Desk
- C. Rat
- D. Frog

9. We use the _____ to listen to music.

- A. camera
- B. speaker
- C. handset
- D. monitor

10. _____ is a machine that can accept data, store data, and change the data into information

- A. Mouse
- B. Car
- C. Computer
- D. Football field

11. _____ is the brain of the computer.

- A. Keyboard
- B. Monitor
- C. CPU
- D. Mouse

12. The picture shown is a/an _____ .



- A. laptop
- B. book
- C. speaker
- D. driver

13. The picture shown is a _____ .



- A. speaker
- B. monitor
- C. driver
- D. keyboard

14. Label the picture correctly



- A. System unit, mouse, scanner, monitor
- B. System unit, speaker, keyboard, monitor
- C. Keyboard, joy stick, plotter, monitor
- D. Scanner, speaker, printer, system unit

15. The monitor is like a _____.

- A. car
- B. television
- C. bicycle
- D. ship

16. Which is the correct option?

- A. Computer eats food
- B. Computer can laugh
- C. Computer accepts data
- D. Computer can cry

17. Which is the correct option?

- A. Computer eats food
- B. Computer can laugh
- C. Computer accepts data
- D. Computer can cry

18. The _____ monitor displays characters in a single colour on another colour background.

- A. maxi-coloured
- B. coloured
- C. monochrome
- D. bichrome

TOPIC: KEYS ON THE KEYBOARD

DIRECTION: Choose the correct answer from the lettered options.

1. The up arrow key points _____.
 - A. downwards
 - B. upwards
 - C. middle
 - D. centre

2. The Del key is used to _____.
 - A. delay
 - B. delete
 - C. dug
 - D. dig

3. The F1, F2, F3 to F12 keys on the keyboard are known as _____.
 - A. final keys
 - B. fractional keys
 - C. function keys
 - D. fixing keys

4. The left arrow key points to the _____.
 - A. left
 - B. middle
 - C. centre
 - D. right

5. The alphabetic keys are keys of the _____.

- A. musical keyboard
- B. computer keyboard
- C. padlock key
- D. car key

6. The alphabetic keys start from ____ to ____.

- A. A-U
- B. A-Q
- C. A-W
- D. A-Z

7. The Backspace key is used for _____.

- A. erasing
- B. painting
- C. spacing
- D. None of the above

8. The car key, musical keyboard, and padlock keys all do _____.

- A. the same kind of work
- B. different works
- C. similar works
- D. little kinds of jobs

9. What does the Page down key do?

- A. It takes the page up.
- B. It takes the page down.
- C. It takes the page to the right.
- D. None of the above.

10. The numeric keys of a computer start from ____ to ____.

- A. 0-10
- B. 1-9
- C. 0-9
- D. 1-10

11. The caps lock key is used to make _____ when turned on.

- A. small letters
- B. numerics
- C. capital letters
- D. numbers

12. The computer keyboard has _____.

- A. numeric keys
- B. key notes
- C. abbreviation keys
- D. All of the above

13. The Esc key is used to _____.

- A. keep dialogue boxes
- B. provide the menu
- C. create icons on the desktop
- D. remove dialogue boxes

14. The arrow keys point in ____ different directions.

- A. 5
- B. 6
- C. 4
- D. 2

15. Which of the following has keys?

- A. Typewriter keyboard
- B. Computer keyboard
- C. Musical keyboard
- D. All of the above

TOPIC: MACHINES

DIRECTION: Choose the correct answer from the lettered options.

1. What is this machine called?



- A. Photocopier
- B. Pen
- C. Pencil
- D. House

2. What is this machine called?



- A. A charcoal iron
- B. An electric iron
- C. A smoking iron
- D. A heating iron

3. A grinding machine is used for grinding _____.

- A. human beings
- B. water
- C. plates
- D. solid food

4. Fill in the missing letters in the word: Tr _ _tm_ _t

- A. e, a, n, e
- B. e, a, e, n
- C. e, e, a, n
- D. a, n, e, n

5. A generator produces _____.

- A. steam
- B. electricity
- C. fire
- D. breeze

6. What is the name of the image in the picture?



- A. Plastic cover and needle
- B. Syringe and needle
- C. A pointer
- D. Pen

7. What is this used for?



- A. To make duplicates or photocopies.
- B. To copyright.
- C. To record videos.
- D. To watch VCDs.

8. A photocopier is used to _____.

- A. make resized copies of a document only
- B. make exact copies of a document
- C. make additional documents to the ones we already have only
- D. None of the above

9. Which of the following is not a type of machine?

A.



B.



C.



D.



10. Which of these are computer related machines?

- A. Photocopier, radio
- B. Television, DVD player
- C. Telephone, ipod
- D. Light, bulb

11. Fill in the missing letters in the word: F_ri_g.

- A. i, n
- B. i, o
- C. o, n
- D. l, n

12. What is this used for?



- A. For biting and stinging.
- B. For flogging.
- C. For screwing nails and pins.
- D. For injecting.

13. Machines include _____.

- A. charcoal irons, bicycles
- B. guns, cutlasses
- C. syringes and needles, wheelbarrows
- D. all of the above

14. What is this used for?



- A. For playing football.
- B. For typing and receiving letters only.
- C. For making duplicates of a written or printed work.
- D. For making and receiving phone calls.

15. A radio is used for _____.

- A. listening to music
- B. listening to movies
- C. playing games
- D. counting numbers

16. The _____ can be used for typing.

- A. calculator
- B. telephone
- C. typewriter
- D. photocopier

17. Which of these is odd?

A.



B.



C.



D.



18. What is the wheelbarrow used for?

- A. To carry houses.
- B. To transport cars.
- C. To transport goods.
- D. None of the above.

19. A gun is used for _____.

- A. playing in the bush
- B. hunting animals
- C. fetching water
- D. all of the above

20. Fill in the missing letters in the word: Tra _ _po_ at_on

- A. n, p, r, t, i
- B. b, c, a, t, i
- C. n, s, r, t, i
- D. e, n, o, e, i

21. The computer is a _____.

- A. handset
- B. television
- C. calculator
- D. machine

22. What is this used for?



- A. For playing games.
- B. For watching videos.
- C. For playing audio cassettes.
- D. For taking pictures.

23. Syringes and needles are used for _____.

- A. market treatment
- B. selling
- C. choking
- D. medical treatment

24. What size of paper do we use to type?

- A. A4
- B. A5
- C. A3
- D. A and B

25. Which item is odd?

A.



B.



C.



D.



26. To make and receive calls, we use _____.

- A. megaphones
- B. talking drum
- C. telephones
- D. microphone

27. A television is used for _____.

- A. watching movies
- B. watching food
- C. playing ludos
- D. making cartoons

28. To perform mathematical calculations, we use _____.

- A. machines
- B. television
- C. ink
- D. calculators

29. What is this machine used for?



- A. For ironing.
- B. For cutting.
- C. For painting.
- D. For cooking.

30. A charcoal iron is used for _____.

- A. ironing
- B. washing
- C. cleaning
- D. polishing

31. Injection is given using a _____.

- A. nail
- B. needle alone
- C. syringe and needle
- D. all of the above

32. A car is used for _____.

- A. transportation
- B. playing
- C. pushing
- D. none of the above

33. which of these is a machine used for transportation?

A.



B.



C.



D.



34. Which of these is not a computer related machine?

A.



B.



C.



D.



35. Which of these does the typewriter use?

- A. Paper and ribbon
- B. Paper and mouse
- C. Monitor and mouse
- D. Ink and monitor

36. Which of the following machines produces electricity?

- A. Generator
- B. Firewood
- C. Charcoal
- D. Candle

37. Which of these is a machine used for hunting?

A.



B.



C.



D.



38. What is this machine used for?



- A. For ironing.
- B. For catching fish.
- C. For transportation.
- D. For lifting things.

39. What is this machine used for?



- A. For generating electricity.
- B. For grinding food such as corn and beans.
- C. For carrying heavy items.
- D. For mowing grass on lawns.

40. What is a machine?

- A. A machine is any appliance in a factory.
- B. A machine is anything that helps us to do work easily.
- C. A machine is anything that is useful.
- D. A machine is any appliance in the house.

TOPIC: PARTS OF THE COMPUTER

DIRECTION: Choose the correct answer from the lettered options.

1. The joystick, floppy disk and hard disk are _____ of the computer.

- A. particles
- B. substances
- C. peripherals
- D. All of the above

2. Does a computer have a mouse?

- A. No
- B. Yes

3. Does the computer have a keyboard?

- A. Yes
- B. No

4. The keyboard is used to _____ into the computer.

- A. lock
- B. unlock
- C. source
- D. type

5. What item is this?



- A. Mouse
- B. Keyboard
- C. Monitor
- D. Television

2. Printers are used for _____

- A. painting pictures
- B. printing
- C. typing
- D. writing

3. Which of the options is a printer?

A.



B.



C.



D.



4. The computer has _____ and _____ parts.

- A. input, output
- B. input, output
- C. input, output
- D. None of the above

5. The hard disk is a _____.

- A. hiding device
- B. storage device
- C. coverage device
- D. None of the above

6. A scanner is used to _____.

- A. print documents
- B. scan documents
- C. type documents
- D. snap pictures and documents

7. Which of these is not a component of the computer?

A.



B.



C.



D.



8. Which of these items is used to scan?

A.



B.



C.



D.



9. Does a computer have a mouse?

A. No

B. Yes

10. What is a System Unit ?

A. It is the processor of the computer.

B. It is the unit that houses other units in the computer.

C. It is the power of the computer system.

D. It is the control unit of the computer.

11. What item is this?



- A. Mouse
- B. Keyboard
- C. Monitor
- D. Television

12. What is this called?



- A. Monitor
- B. Mouse
- C. System Unit
- D. CPA

13. The joystick works like a _____.

- A. mice
- B. mouse
- C. pen
- D. pencil

14. The keyboard is used to _____ into the computer.

- A. lock
- B. unlock
- C. source
- D. type

15. Which of the following can be used to print?

A.



B.



C.



D.



16. Does a computer have a monitor?

A. Yes

B. No

17. Which of the following is odd?

A.



B.



C.



D.




18. A _____ has parts just like the human body.

- A. computer
- B. system unit
- C. mouse
- D. keyboard

The correct answer is option [A].

19. Look at the pictures below. Which of these is the picture of a mouse?

A.



B.



C.



D.



20. The mouse is usually placed on a _____.

A. mouse plate

B. mouse stand

C. mouse pad

D. mouse mat

The correct answer is option [C].

TOPIC: THE COMPUTER

DIRECTION: Choose the correct answer from the lettered options.

1. A computer can change data into information. Is this statement true or false?

- A. False
- B. True

2. Does a computer run?

- A. No
- B. Yes

3. Fill in the gaps with the missing letters in the word: C _ MP _ T _ R.

- A. O, U, E
- B. O, M, R
- C. N, O, A
- D. U, E, E

4. What is a Computer?

- A. It is a machine that can accept and store data, but cannot change it into useful information kept in the computer memory.
- B. It is a typing machine used to type documents and play games.
- C. It is a machine that can accept and store data, and change it into useful information kept in the computer memory.
- D. It is a machine used for storing and retrieving data and information.

5. Can a computer eat food?

- A. Yes
- B. No

6. In the word COMPUTER, the letter U is in the ____ position.

- A. 5th
- B. 6th
- C. 8th
- D. 2nd

7. Does a computer accept data?

- A. No
- B. Yes

8. What item is this?



- A. A picture.
- B. A screen.
- C. A movie.
- D. A computer monitor.

9. Fill in the missing letters in the word: C _ M _ U _ E _.

- A. O, P, T, R
- B. O, P, N, R
- C. O, A, R, M
- D. E, T, S, R

10. Fill in the missing letters in the word: CO _ PU _ E _.

- A. N, T, R
- B. M, T, R
- C. U, T, R
- D. N, T, M

11. How many letters are in the word computer?

- A. 6
- B. 10
- C. 8
- D. 7

TOPIC: USES OF COMPUTERS

DIRECTION: Choose the correct answer from the lettered options.

1. The computer can be used to set ____ and ____.
 - A. day and thyme
 - B. date and time
 - C. place, location
 - D. None of the above

2. In school, the computer can be used to _____.
 - A. make time tables
 - B. process text
 - C. A and B
 - D. cook

3. The _____ and _____ are used in offices for typing and printing of documents.
 - A. telephone, blender
 - B. computer, printer
 - C. cooker, computer
 - D. printer, microwave

4. At home, we use the computer for _____.
 - A. playing games
 - B. learning
 - C. keeping records
 - D. all of the above

5. In banks, the computer can be used to _____.

- A. keep records safely
- B. provide customers with statement of accounts
- C. make the withdrawal and deposit of money easier
- D. all of the above

6. The uses of the computer include _____.

- A. sending signals from satellite
- B. browsing the internet
- C. sending messages from computer to phone
- D. all of the above

7. The computer can be used for all of the following except _____.

- A. keeping records
- B. painting furniture
- C. typing documents
- D. playing games

8. The computer can be used to _____.

- A. calculate
- B. run
- C. prepare dishes
- D. drink

9. Which of the following can be used to diagnose patients in the hospital?

A.



B.



C.



D.



10. In the hospital, the computer can be used to _____.

- A. keep records of patients
- B. carry out diagnosis
- C. A and B
- D. None of the above

11. Computers can be used in _____ for _____.

- A. libraries, keeping records of books
- B. churches, for collecting offerings
- C. kitchen, for washing dishes
- D. laundry, for washing clothes

12. Which of these is used to type into a computer?

A.



B.



C.



D.



13. In supermarkets, the computer can be used to _____.

A. sell solid goods

B. update accounts

C. provide prices of goods

D. B and C

14. The computer can be used to do all the following things, except _____.



- A. play movies
- B. prepare dishes
- C. create drawings and designs
- D. paint pictures

15. The computer can be used to _____.

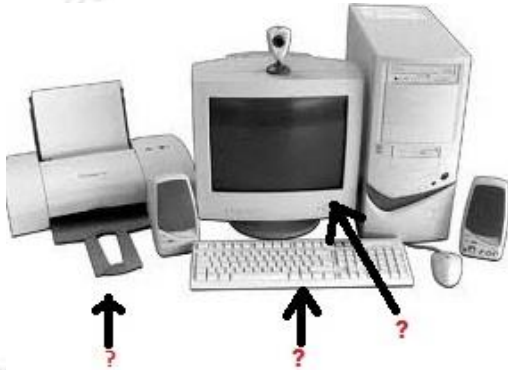
- A. listen to music and play games
- B. learn from study materials and watch movies
- C. draw pictures and type documents
- D. all of the above

ANSWERS

TOPIC: COMPUTER APPRECIATION

DIRECTION: Choose the correct answer from the lettered options.

1. Label the image correctly



- A. Printer, web cam, mouse
- B. Printer, keyboard, monitor
- C. Speaker, system unit
- D. Web cam, scanner, speaker

The correct answer is option [B]

2. The picture shown is a _____ .



- A. speaker

- B. monitor
- C. mouse
- D. car

The correct answer is option [B]

3. We use the _____ to print our documents from the computer.

- A. printer
- B. computer
- C. monitor
- D. pencil

The correct answer is option [A]

3. We use the _____ to print our documents from the computer.

- A. printer
- B. computer
- C. monitor
- D. pencil

The correct answer is option [A]

3. We use the _____ to print our documents from the computer.

- A. printer
- B. computer
- C. monitor
- D. pencil

The correct answer is option [A]

5. Label the picture correctly



- A. Speaker, Keyboard
- B. System unit, Speaker
- C. Scanner, Keyboard
- D. Monitor, Scanner

The correct answer is option [D]

6. The part of the computer system that looks like a rat is called _____ .

- A. CPU
- B. mouse
- C. keyboard
- D. monitor

The correct answer is option [B]

7. We use the computer to do the following EXCEPT _____ .

- A. draw
- B. type
- C. play music
- D. eat

The correct answer is option [D]

8. Which of these is part of a computer system?

- A. Rat
- B. Mouse
- C. Dog
- D. Cat

The correct answer is option [B]

9. _____ is a part of a computer system.

- A. Mouse
- B. Desk
- C. Rat
- D. Frog

The correct answer is option [A]

11. We use the _____ to listen to music.

- A. camera
- B. speaker
- C. handset
- D. monitor

The correct answer is option [B]

12. _____ is a machine that can accept data, store data, and change the data into information

- A. Mouse
- B. Car
- C. Computer
- D. Football field

The correct answer is option [C]

13. _____ is the brain of the computer.

- A. Keyboard
- B. Monitor
- C. CPU
- D. Mouse

The correct answer is option [C]

14. The picture shown is a/an _____.



- A. laptop
- B. book
- C. speaker
- D. driver

The correct answer is option [C]

15. The picture shown is a _____.



- A. speaker
- B. monitor
- C. driver
- D. keyboard

The correct answer is option [D]

16. Label the picture correctly



- A. System unit, mouse, scanner, monitor
- B. System unit, speaker, keyboard, monitor
- C. Keyboard, joy stick, plotter, monitor
- D. Scanner, speaker, printer, system unit

The correct answer is option [A]

17. The monitor is like a _____.

- A. car
- B. television
- C. bicycle
- D. ship

The correct answer is option [B]

18. Which is the correct option?

- A. Computer eats food

- B. Computer can laugh
- C. Computer accepts data
- D. Computer can cry

The correct answer is option [C]

18. Which is the correct option?

- A. Computer eats food
- B. Computer can laugh
- C. Computer accepts data
- D. Computer can cry

The correct answer is option [C]

19. The _____ monitor displays characters in a single colour on another colour background.

- A. maxi-coloured
- B. coloured
- C. monochrome
- D. bichrome

The correct answer is option [C].

TOPIC: KEYS ON THE KEYBOARD

DIRECTION: Choose the correct answer from the lettered options.

1. The up arrow key points _____.

- A. downwards
- B. upwards
- C. middle
- D. centre

The correct answer is option [B].

2. The Del key is used to _____.

- A. delay
- B. delete
- C. dug
- D. dig

The correct answer is option [B].

3. The F1, F2, F3 to F12 keys on the keyboard are known as _____.

- A. final keys
- B. fractional keys
- C. function keys
- D. fixing keys

The correct answer is option [C].

4. The left arrow key points to the _____.

- A. left
- B. middle
- C. centre
- D. right

The correct answer is option [A].

5. The alphabetic keys are keys of the _____.

- A. musical keyboard
- B. computer keyboard
- C. padlock key
- D. car key

The correct answer is option [B].

6. The alphabetic keys start from ____ to ____.

- A. A-U
- B. A-Q
- C. A-W
- D. A-Z

The correct answer is option [D].

7. The Backspace key is used for _____.

- A. erasing
- B. painting
- C. spacing
- D. None of the above

The correct answer is option [A].

8. The car key, musical keyboard, and padlock keys all do _____.

- A. the same kind of work
- B. different works
- C. similar works
- D. little kinds of jobs

The correct answer is option [B].

9. What does the Page down key do?

- A. It takes the page up.
- B. It takes the page down.
- C. It takes the page to the right.
- D. None of the above.

The correct answer is option [B].

10. The numeric keys of a computer start from ____ to ____.

- A. 0-10
- B. 1-9
- C. 0-9
- D. 1-10

The correct answer is option [C].

11. The caps lock key is used to make _____ when turned on.

- A. small letters
- B. numerics
- C. capital letters
- D. numbers

The correct answer is option [C].

12. The computer keyboard has _____.

- A. numeric keys
- B. key notes
- C. abbreviation keys
- D. All of the above

The correct answer is option [A].

13. The Esc key is used to _____.

- A. keep dialogue boxes

- B. provide the menu
- C. create icons on the desktop
- D. remove dialogue boxes

The correct answer is option [D].

14. The arrow keys point in ____ different directions.

- A. 5
- B. 6
- C. 4
- D. 2

The correct answer is option [C].

15. Which of the following has keys?

- A. Typewriter keyboard
- B. Computer keyboard
- C. Musical keyboard
- D. All of the above

The correct answer is option [D].

TOPIC: MACHINES

DIRECTION: Choose the correct answer from the lettered options.

1. What is this machine called?



- A. Photocopier
- B. Pen
- C. Pencil
- D. House

The correct answer is option [A]

2. What is this machine called?



- A. A charcoal iron
- B. An electric iron
- C. A smoking iron
- D. A heating iron

The correct answer is option [A]

3. A grinding machine is used for grinding _____.

- A. human beings
- B. water
- C. plates
- D. solid food

The correct answer is option [D].

4. Fill in the missing letters in the word: Tr _ _tm_ _t

- A. e, a, n, e
- B. e, a, e, n
- C. e, e, a, n
- D. a, n, e, n

The correct answer is option [B].

5. A generator produces _____.

- A. steam
- B. electricity
- C. fire
- D. breeze

The correct answer is option [B].

6. What is the name of the image in the picture?



- A. Plastic cover and needle
- B. Syringe and needle
- C. A pointer
- D. Pen

The correct answer is option [B]

7. What is this used for?



- A. To make duplicates or photocopies.
- B. To copyright.
- C. To record videos.
- D. To watch VCDs.

The correct answer is option [A]

8. A photocopier is used to _____.

- A. make resized copies of a document only
- B. make exact copies of a document
- C. make additional documents to the ones we already have only
- D. None of the above

The correct answer is option [B].

9. Which of the following is not a type of machine?

A.



B.



C.



D.



The correct answer is option [B]

10. Which of these are computer related machines?

- A. Photocopier, radio
- B. Television, DVD player
- C. Telephone, ipod

D. Light, bulb

The correct answer is option [C]

11. Fill in the missing letters in the word: F_r_l_g.

A. i, n

B. i, o

C. o, n

D. l, n

The correct answer is option [A].

12. What is this used for?



A. For biting and stinging.

B. For flogging.

C. For screwing nails and pins.

D. For injecting.

The correct answer is option [D]

13. Machines include _____.

A. charcoal irons, bicycles

B. guns, cutlasses

C. syringes and needles, wheelbarrows

D. all of the above

The correct answer is option [D].

14. What is this used for?



- A. For playing football.
- B. For typing and receiving letters only.
- C. For making duplicates of a written or printed work.
- D. For making and receiving phone calls.

The correct answer is option [C]

15. A radio is used for _____.

- A. listening to music
- B. listening to movies
- C. playing games
- D. counting numbers

The correct answer is option [A].

16. The _____ can be used for typing.

- A. calculator
- B. telephone
- C. typewriter
- D. photocopier

The correct answer is option [C].

17. Which of these is odd?

A.



B.



C.



D.



The correct answer is option [B]

18. What is the wheelbarrow used for?

- A. To carry houses.
- B. To transport cars.
- C. To transport goods.
- D. None of the above.

The correct answer is option [C].

19. A gun is used for _____.

- A. playing in the bush
- B. hunting animals
- C. fetching water
- D. all of the above

The correct answer is option [B].

20. Fill in the missing letters in the word: Tra _ _po_ at_on

- A. n, p, r, t, i
- B. b, c, a, t, i
- C. n, s, r, t, i
- D. e, n, o, e, i

The correct answer is option [C].

21. The computer is a _____.

- A. handset
- B. television
- C. calculator
- D. machine

The correct answer is option [D].

22. What is this used for?



- A. For playing games.

- B. For watching videos.
- C. For playing audio cassettes.
- D. For taking pictures.

The correct answer is option [C]

23. Syringes and needles are used for _____.

- A. market treatment
- B. selling
- C. choking
- D. medical treatment

The correct answer is option [D].

24. What size of paper do we use to type?

- A. A4
- B. A5
- C. A3
- D. A and B

The correct answer is option [D].

25. Which item is odd?

A.



B.



C.



D.



The correct answer is option [D].

26. To make and receive calls, we use _____.

- A. megaphones
- B. talking drum
- C. telephones
- D. microphone

The correct answer is option [C].

27. A television is used for _____.

- A. watching movies
- B. watching food
- C. playing ludos
- D. making cartoons

The correct answer is option [A].

28. To perform mathematical calculations, we use _____.

- A. machines
- B. television
- C. ink
- D. calculators

The correct answer is option [D].

29. What is this machine used for?



- A. For ironing.
- B. For cutting.
- C. For painting.
- D. For cooking.

The correct answer is option [A]

30. A charcoal iron is used for _____.

- A. ironing
- B. washing
- C. cleaning
- D. polishing

The correct answer is option [A].

31. Injection is given using a _____.

- A. nail
- B. needle alone
- C. syringe and needle
- D. all of the above

The correct answer is option [C].

32. A car is used for _____.

- A. transportation
- B. playing
- C. pushing

D. none of the above

The correct answer is option [A].

33. Which of these is a machine used for transportation?

A.



B.



C.



D.



The correct answer is option [C]

34. Which of these is not a computer related machine?

A.



B.



C.



D.



The correct answer is option [B]

35. Which of these does the typewriter use?

- A. Paper and ribbon
- B. Paper and mouse
- C. Monitor and mouse
- D. Ink and monitor

The correct answer is option [A].

36. Which of the following machines produces electricity?

- A. Generator
- B. Firewood
- C. Charcoal
- D. Candle

The correct answer is option [A].

37. Which of these is a machine used for hunting?



D.



The correct answer is option [D]

38. What is this machine used for?



- A. For ironing.
- B. For catching fish.
- C. For transportation.
- D. For lifting things.

The correct answer is option [C]

39. What is this machine used for?



- A. For generating electricity.
- B. For grinding food such as corn and beans.
- C. For carrying heavy items.
- D. For mowing grass on lawns.

The correct answer is option [A]

40. What is a machine?

- A. A machine is any appliance in a factory.
- B. A machine is anything that helps us to do work easily.
- C. A machine is anything that is useful.
- D. A machine is any appliance in the house.

The correct answer is option [B].

TOPIC: PARTS OF THE COMPUTER

DIRECTION: Choose the correct answer from the lettered options.

1. The joystick, floppy disk and hard disk are _____ of the computer.

- A. particles
- B. substances
- C. peripherals
- D. All of the above

The correct answer is option [C].

2. Does a computer have a mouse?

- A. No
- B. Yes

The correct answer is option [B].

3. Does the computer have a keyboard?

- A. Yes
- B. No

The correct answer is option [A].

4. The keyboard is used to _____ into the computer.

- A. lock
- B. unlock
- C. source
- D. type

The correct answer is option [D].

5. What item is this?



- A. Mouse
- B. Keyboard
- C. Monitor
- D. Television

The correct answer is option [B]

TOPIC: PARTS OF THE COMPUTER

DIRECTION: Choose the correct answer from the lettered options.

1. The joystick, floppy disk and hard disk are _____ of the computer.

- A. particles
- B. substances
- C. peripherals
- D. All of the above

The correct answer is option [C].

2. Printers are used for _____

- A. painting pictures
- B. printing
- C. typing
- D. writing

The correct answer is option [B].

3. Which of the options is a printer?

A.



B.



C.



D.



The correct answer is option [A].

4. The computer has ____ and ____ parts.

A. input, output

B. input, output

C. input, output

D. None of the above

The correct answer is option [A].

5. The hard disk is a _____.

- A. hiding device
- B. storage device
- C. coverage device
- D. None of the above

The correct answer is option [B].

6. A scanner is used to _____.

- A. print documents
- B. scan documents
- C. type documents
- D. snap pictures and documents

The correct answer is option [B].

7. Which of these is not a component of the computer?

A.



B.



C.



D.



The correct answer is option [C]

8. Which of these items is used to scan?

A.



B.



C.



D.



The correct answer is option [C]

9. Does a computer have a mouse?

- A. No
- B. Yes

The correct answer is option [B].

10. What is a System Unit ?

- A. It is the processor of the computer.
- B. It is the unit that houses other units in the computer.
- C. It is the power of the computer system.
- D. It is the control unit of the computer.

The correct answer is option [B].

11. What item is this?



- A. Mouse
- B. Keyboard
- C. Monitor
- D. Television

The correct answer is option [B]

12. What is this called?



- A. Monitor
- B. Mouse
- C. System Unit
- D. CPA

The correct answer is option [C]

13. The joystick works like a _____.

- A. mice
- B. mouse
- C. pen
- D. pencil

The correct answer is option [B].

14. The keyboard is used to _____ into the computer.

- A. lock
- B. unlock
- C. source
- D. type

The correct answer is option [D].

15. Which of the following can be used to print?

A.



B.



C.



D.



The correct answer is option [A]

16. Does a computer have a monitor?

A. Yes

B. No

The correct answer is option [A].

17. Which of the following is odd?

A.



B.



C.



D.



The correct answer is option [C]

18. A _____ has parts just like the human body.

- A. computer
- B. system unit
- C. mouse
- D. keyboard

The correct answer is option [A].

19. Look at the pictures below. Which of these is the picture of a mouse?



The correct answer is option [C]

20. The mouse is usually placed on a _____.

- A. mouse plate
- B. mouse stand
- C. mouse pad
- D. mouse mat

The correct answer is option [C].

TOPIC: THE COMPUTER

DIRECTION: Choose the correct answer from the lettered options.

1. A computer can change data into information. Is this statement true or false?

- A. False
- B. True

The correct answer is option [B].

2. Does a computer run?

- A. No
- B. Yes

The correct answer is option [A].

3. Fill in the gaps with the missing letters in the word: C _ MP _ T _ R.

- A. O, U, E
- B. O, M, R
- C. N, O, A
- D. U, E, E

The correct answer is option [A].

4. What is a Computer?

- A. It is a machine that can accept and store data, but cannot change it into useful information kept in the computer memory.
- B. It is a typing machine used to type documents and play games.
- C. It is a machine that can accept and store data, and change it into useful information kept in the computer memory.
- D. It is a machine used for storing and retrieving data and information.

The correct answer is option [C].

5. Can a computer eat food?

- A. Yes
- B. No

The correct answer is option [B].

6. In the word COMPUTER, the letter U is in the ____ position.

- A. 5th
- B. 6th
- C. 8th
- D. 2nd

The correct answer is option [A].

7. What is a Computer?

- A. It is a machine that can accept and store data, but cannot change it into useful information kept in the computer memory.
- B. It is a typing machine used to type documents and play games.
- C. It is a machine that can accept and store data, and change it into useful information kept in the computer memory.
- D. It is a machine used for storing and retrieving data and information.

The correct answer is option [C].

8. Does a computer accept data?

- A. No
- B. Yes

The correct answer is option [B].

9. What item is this?



- A. A picture.
- B. A screen.
- C. A movie.
- D. A computer monitor.

The correct answer is option [D]

10. Fill in the missing letters in the word: C _ M _ U _ E _

- A. O, P, T, R
- B. O, P, N, R
- C. O, A, R, M
- D. E, T, S, R

The correct answer is option [A].

11. Fill in the missing letters in the word: CO _ PU _ E _

- A. N, T, R
- B. M, T, R
- C. U, T, R
- D. N, T, M

The correct answer is option [B].

12. How many letters are in the word computer?

- A. 6
- B. 10
- C. 8
- D. 7

The correct answer is option [C].

TOPIC: USES OF COMPUTERS

DIRECTION: Choose the correct answer from the lettered options.

1. The computer can be used to set ____ and ____.

- A. day and thyme
- B. date and time
- C. place, location
- D. None of the above

The correct answer is option [B].

2. In school, the computer can be used to _____.

- A. make time tables
- B. process text
- C. A and B
- D. cook

The correct answer is option [C].

3. The _____ and _____ are used in offices for typing and printing of documents.

- A. telephone, blender
- B. computer, printer
- C. cooker, computer
- D. printer, microwave

The correct answer is option [B].

4. At home, we use the computer for _____.

- A. playing games
- B. learning
- C. keeping records
- D. all of the above

The correct answer is option [D].

5. In banks, the computer can be used to _____.

- A. keep records safely
- B. provide customers with statement of accounts
- C. make the withdrawal and deposit of money easier
- D. all of the above

The correct answer is option [D].

6. The uses of the computer include _____.

- A. sending signals from satellite
- B. browsing the internet
- C. sending messages from computer to phone
- D. all of the above

The correct answer is option [D].

7. The computer can be used for all of the following except _____.

- A. keeping records
- B. painting furniture
- C. typing documents
- D. playing games

The correct answer is option [B].

8. The computer can be used to _____.

- A. calculate
- B. run
- C. prepare dishes
- D. drink

The correct answer is option [A].

9. Which of the following can be used to diagnose patients in the hospital?

A.



B.



C.



D.



The correct answer is option [A]

10. In the hospital, the computer can be used to _____.

A. keep records of patients

B. carry out diagnosis

C. A and B

D. None of the above

The correct answer is option [C].

11. Computers can be used in _____ for _____.

- A. libraries, keeping records of books
- B. churches, for collecting offerings
- C. kitchen, for washing dishes
- D. laundry, for washing clothes

The correct answer is option [A].

12. Which of these is used to type into a computer?

A.



B.



C.



D.



The correct answer is option [C]

13. In supermarkets, the computer can be used to _____.

- A. sell solid goods
- B. update accounts
- C. provide prices of goods
- D. B and C

The correct answer is option [D].

14. The computer can be used to do all the following things, except _____.



- A. play movies
- B. prepare dishes
- C. create drawings and designs
- D. paint pictures

The correct answer is option [B]

15. The computer can be used to _____.

- A. listen to music and play games
- B. learn from study materials and watch movies
- C. draw pictures and type documents
- D. all of the above

The correct answer is option [D].